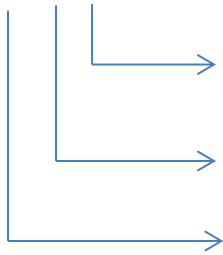


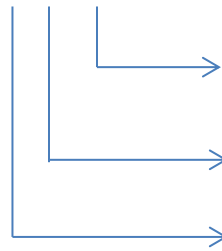
Mathematics Worksheet

Write the place value:

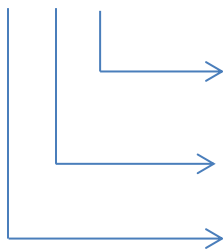
2 4 5



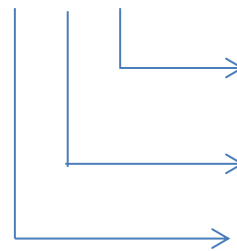
5 0 6



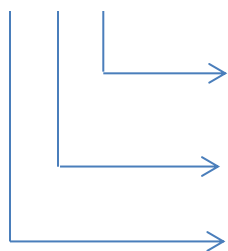
1 8 0



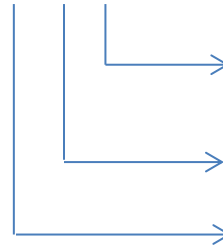
2 0 0



1 1 1



9 6 3





Ayanpolymath

Link: <https://www.instagram.com/ayan.polymath/>



Ayan Polymath

Link:

<https://www.facebook.com/profile.php?id=100094728185263>



@ayan_polymath

Link: https://twitter.com/ayan_polymath



Ayan Polymath

Link: <https://www.youtube.com/@MathematicalLogics32/featured>

www.ayanpolymath.com