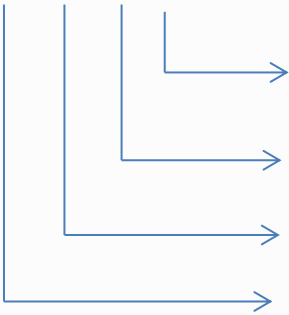


# Unit 1: Place Value

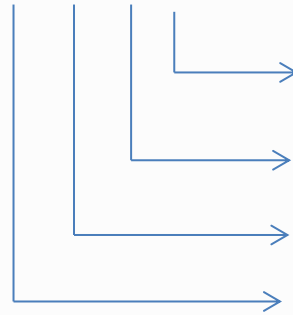
Grade 3 : Mathematics

Write the place value of each digit:

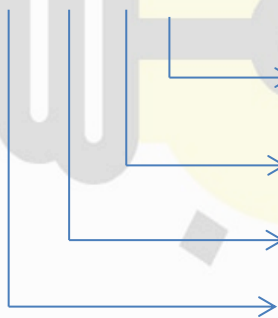
4 2 4 5



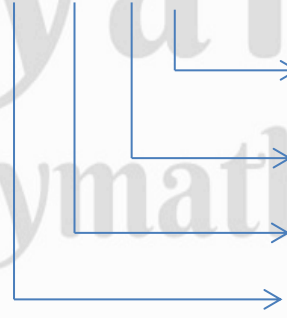
7 2 1 0



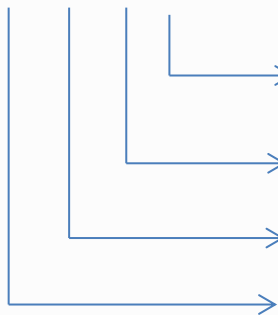
6 0 0 3



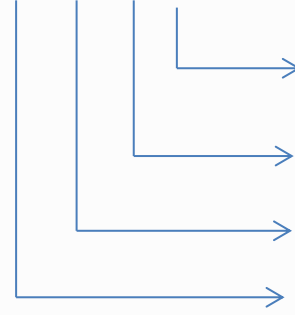
1 9 2 7



2 2 9 0



4 0 4 0





**Ayanpolymath**

**Link:** <https://www.instagram.com/ayan.polymath/>



**Ayan Polymath**

**Link:**

<https://www.facebook.com/profile.php?id=100094728185263>



**@ayan\_polymath**

**Link:** [https://twitter.com/ayan\\_polymath](https://twitter.com/ayan_polymath)



YouTube

**Ayan Polymath**

**Link:** <https://www.youtube.com/@MathematicalLogics32/featured>

**[www.ayanpolymath.com](http://www.ayanpolymath.com)**